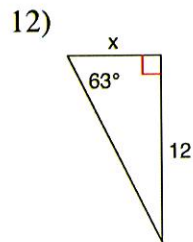
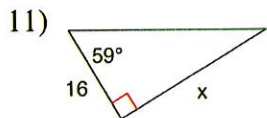
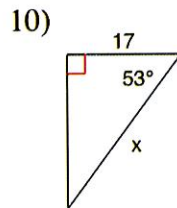
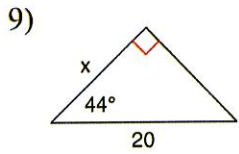
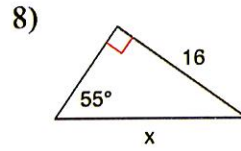
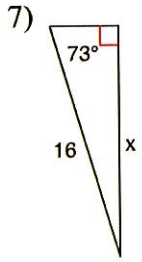


Find the missing side. Round to the nearest tenth.



Name: _____ Date: _____ Per. _____

Homework 5.2 Sin, Cos, Tan!